

READING COMPREHENSION

A visit to the Zoo



ENGLISH
CREATED RESOURCES

We went to the zoo today.
Jack and Kate saw a tiger.
Ben saw a big brown bear.
Jen saw a monkey eating
a banana.



1. Put the events in order. Write 1, 2, or 3 in the box.



2. Write 3 animals the kids saw:

a. _____

b. _____

c. _____

3. The monkey was
eating

a. a banana

b. a strawberry

c. an apple

4. Where did the kids go?



Kindergarten MATH

Dominos Addition



Add the dots on each domino and fill in the circle with amount.

=	=
=	=
=	=
=	=
=	=
=	=
=	=



Read the following passage and
answer the questions :



Mark is at the park . His dog Max, is with him. Mark flies his kite and plays with Max. They run and jump in the sun. Then Mark goes to the pond to see the ducks. He thinks they are so cute and funny.

Questions

1 - Where is Mark and his dog ?

.....

2 - What is Mark's dog name ?

.....

3 - What do Mark and his dog do in the park

.....

4 - Why does Mark go to the pond ?

.....

© Copyright English Created Resources 2020 All rights reserved



READ THE STORY, THEN SELECT THE CORRECT ANSWER.

STORY 9

The map

Can you see the map?
Yes! I can see a cat on the map.
The map has a cat and a van.



1

I can see the _____.

map

man

tan

2

I can see the _____
on the map.

pan

van

hat

3

The map has a van
and a _____.

cap

van

cat



READ THE STORY, THEN SELECT THE CORRECT ANSWER.

STORY 4

Sam the ant

Sam is an ant.

Sam is on the mat.

Sam can see a bee.



1

Sam is an _____.

ant

egg

fan

2

Sam is on the _____.

bee

mat

can

3

Sam can see a _____.

hat

bat

bee

HOLIDAY HOMEWORK - KG2

ENGLISH

Complete the given worksheets.

(PDF format will be shared)

MATH

Complete the given worksheets.


(PDF format will be shared)

EVS

Make a 3D model on topic : INNOVATION

ART AND CRAFT BOOK

Complete the page no. 8,11,14,15,22 and 23.



WORKSHEETS

READING COMPREHENSION

A visit to the Zoo

We went to the zoo today.
Jack and Kate saw a tiger.
Ben saw a big brown bear.
Jen saw a monkey eating a banana.

1. Put the events in order. Write 1, 2, or 3 in the box.



2. Write 3 animals the kids saw: _____
3. The monkey was eating _____
- a. _____
- b. _____
- c. _____
4. Where did the kids go? _____



Read the following passage and answer the questions:



Mark is at the park. His dog Max, is with him. Mark flies his kite and plays with Max. They run and jump in the sun. Then Mark goes to the pond to see the ducks. He thinks they are so cute and funny.

Questions

- 1 - Where is Mark and his dog?
- 2 - What is Mark's dog name?
- 3 - What do Mark and his dog do in the park?
- 4 - Why does Mark go to the pond?

© Copyright English Created Resources 2020 All rights reserved



READ THE STORY, THEN SELECT THE CORRECT ANSWER.

STORY 4

Sam the ant

Sam is an ant.
Sam is on the mat.
Sam can see a bee.



1. Sam is an _____.
ant
egg
fan
2. Sam is on the _____.
bee
mat
can
3. Sam can see a _____.
hat
bat
bee

© 2023 English Created Resources



READ THE STORY, THEN SELECT THE CORRECT ANSWER.

STORY 9

The map

Can you see the map?
Yes! I can see a cat on the map.
The map has a cat and a van.









1. I can see the _____.
map
man
tan
2. I can see the _____.
pan
van
hat
3. The map has a van and a _____.
cap
van
cat

© 2023 English Created Resources

WORKSHEETS

Color by Number

3	 WHITE	5	 GREEN	7	 YELLOW
4	 GRAY	6	 PINK	8	 BLUE

2+3	3+3	4+1	4+2	5+0	1+5	3+2
3+4	2+5	1+6	7+0	4+3		
0+8	1+7	3+1	1+3	3+1	6+2	
7+1	2+2	3+1	2+1	0+4	8+0	5+3
5+3	6+2	0+8	3+5	2+6		
0+5	2+4	1+4	5+1	2+3	3+3	4+1

Name: _____

How Many Pets?

Meg has 3 cats. Tom has 3 dogs.
How many pets are there in all?

Draw a picture.

Tally

Use a number line.



Write the equation.

Write the answer.



_____ Pets

Word Problems



- 1) Mary has 3 bananas and 4 cherries. How many fruits does she have in all?

 +  =

- 2) There are 4 orange slices in a plate. Pam adds 4 more. How many orange slices are there in the plate now?

 +  =

- 3) Tina has 5 candies. Rosy has 4 candies. How many candies they have in all?

 +  =

www.megaworkbook.com

Basketball Addition

Circle the balls below that show ways of making 7.

5+2

6+3

2+5

3+4

0+8

1+6

2+4